



UNIVERSITY OF CAMBRIDGE INTERNATIONAL EXAMINATIONS
International General Certificate of Secondary Education

CANDIDATE
NAME

CENTRE
NUMBER

--	--	--	--	--

CANDIDATE
NUMBER

--	--	--	--



TRAVEL AND TOURISM

0471/01

Core Module

May/June 2013

2 hours

Candidates answer on the Question Paper.

No Additional Materials are required.

READ THESE INSTRUCTIONS FIRST

Write your Centre number, candidate number and name on all the work you hand in.

Write in dark blue or black pen.

You may use a soft pencil for any diagrams, graphs or rough working.

Do not use staples, paper clips, highlighters, glue or correction fluid.

DO NOT WRITE IN ANY BARCODES.

Answer **all** questions.

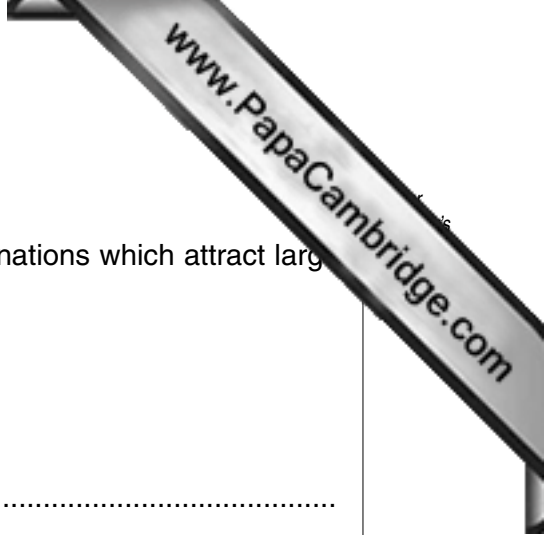
All the figures referred to in the questions are contained in the Insert.

At the end of the examination, fasten all your work securely together.

The number of marks is given in brackets [] at the end of each question or part question.

This document consists of **12** printed pages and **1** Insert.





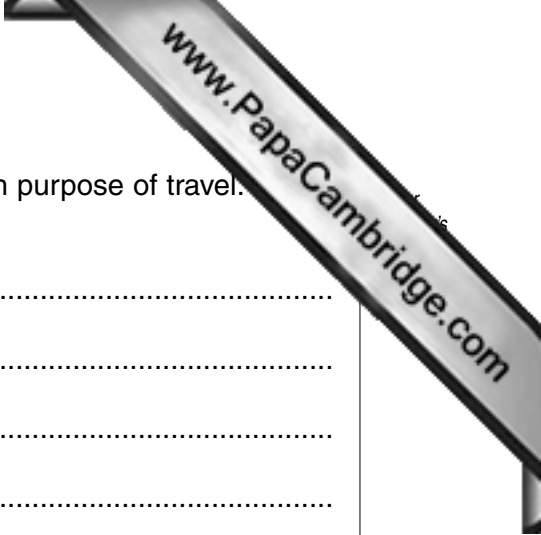
Question 1

Refer to Fig. 1 (Insert), a world map showing the location of two destinations which attract large numbers of international tourists.

(a) Name the following:

- sea A
.....
- line of latitude B
.....
- capital city shown as destination C
.....
- small nation state shown as destination D
.....
- the term that best describes climatic conditions at destination D
.....

[5]



(b) International tourists can be classified according to their main purpose of travel. **and** give an example of the following:

- medical tourism
-
-
-
-
- ecotourism
-
-
-
-
- religious tourism
-
-
-

[6]

(c) Many leisure tourists visit historic sites during their holidays. Fig. 2 (Insert) is a photograph taken at the entrance of an ancient Egyptian temple in Luxor. Identify and explain the **two** ways in which visitor movement is managed at the site to avoid negative environmental impacts.

- 1
-
-
-
-
- 2
-
-
-
-

[4]



Question 2

Refer to Fig. 3 (Insert), information about a hotel in the alpine resort of Mürren, Switzerland.

(a) Tourism in Mürren is seasonal. Using only information from Fig. 3, identify the following:

- **two** winter outdoor activities
 - 1
 - 2
 - **one** summer outdoor activity
- [3]

(b) The hotel offers guests a choice of accommodation. State **four** ways in which an apartment is likely to differ from a standard hotel room.

- 1
 - 2
 - 3
 - 4
- [4]

(c) Describe fully how the hotel's restaurant is likely to be organised for the service of the following meals:

- breakfast buffet
- set evening meal

[6]



Question 3

(a) Refer to Fig. 4 (Insert), photographs taken by leisure tourists taking part in an organised sightseeing tour on the Caribbean island of St. Lucia. The helicopter tour takes off from the town of Castries, which is close to most of St. Lucia’s hotels and cruise ship jetties. Identify and explain **two** ways in which the tour’s operator is looking after passengers’ health and safety.

1.....
.....
.....
.....

2.....
.....
.....
..... [4]

(b) Most passengers will book sightseeing tours with staff at the tour desk in their hotel or with shore excursions staff on-board their cruise ship. Fig. 5 (Insert), shows a typical chain of distribution for tourism products. Describe and explain the relationship between operators of local tours and hotels/cruise ships.

.....
.....
.....
.....
.....
.....
.....
.....
.....
.....
.....
.....
.....
.....
.....
.....
..... [6]



(c) Refer to Fig. 6 (Insert), information about St. Lucia's ferry terminal.

(i) Identify the following:

- the island destination served by the ferry from St. Lucia

.....

- the size of the ferry terminal

.....

- the passenger seating capacity of the terminal

.....

[3]

(ii) Explain how the ferry terminal provides passengers with the following:

- an accessible location

.....

.....

.....

.....

.....

- a comfortable environment

.....

.....

.....

.....

.....

[6]



Question 4

Refer to Fig. 7 (Insert), information about a new Jumeirah Group hotel in Pudong, China.

- (a) Identify and explain **three** ways in which the Jumeirah Himalayas Hotel Shanghai will appeal to business tourists.

1

.....

.....

.....

2

.....

.....

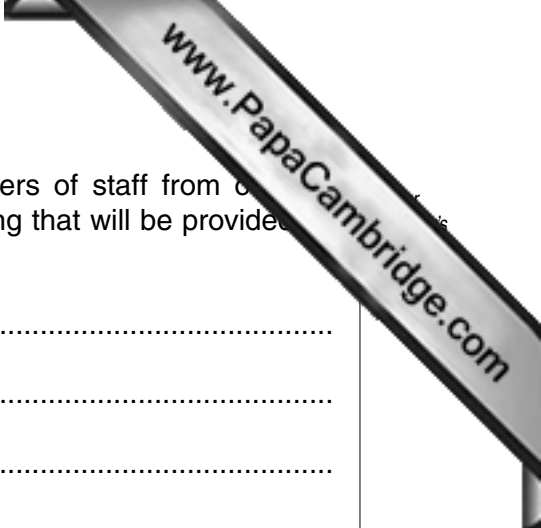
.....

3

.....

.....

..... [6]



(b) The Jumeirah Group currently employs over 10000 members of staff from over 100 different countries. Suggest and explain **three** types of training that will be provided to staff in front-line customer service roles.

1

.....

.....

.....

2

.....

.....

.....

3

.....

.....

.....

..... [6]

(c) One of the features of the Jumeirah Group is its outstanding customer service. Describe how a member of the waiting staff in a Jumeirah restaurant will be expected to respond to a guest asking for an item not listed on the menu.

.....

.....

.....

.....

.....

..... [3]

